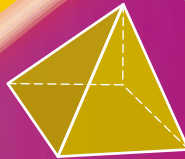


# New wave mental maths

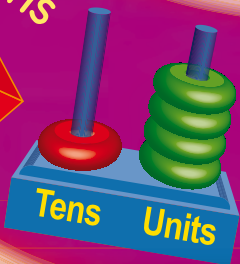
A



## Trial booklet




Evans




$$2 + \square = 6$$



25 kg



Odds



Student's name:



# STUDENT RECORD SHEET

Date	Date	Date	Date	Date	Date	Date	Date	Date	Date
WEEK 1	WEEK 2	WEEK 3	WEEK 4	WEEK 5	WEEK 6	WEEK 7	WEEK 8	WEEK 9	WEEK 10
M	M	M	M	M	M	M	M	M	M
Tu.	Tu.	Tu.	Tu.	Tu.	Tu.	Tu.	Tu.	Tu.	Tu.
W	W	W	W	W	W	W	W	W	W
Th.	Th.	Th.	Th.	Th.	Th.	Th.	Th.	Th.	Th.
F	F	F	F	F	F	F	F	F	F

Date	Date	Date	Date	Date	Date	Date	Date	Date	Date
WEEK 11	WEEK 12	WEEK 13	WEEK 14	WEEK 15	WEEK 16	WEEK 17	WEEK 18	WEEK 19	WEEK 20
M	M	M	M	M	M	M	M	M	M
Tu.	Tu.	Tu.	Tu.	Tu.	Tu.	Tu.	Tu.	Tu.	Tu.
W	W	W	W	W	W	W	W	W	W
Th.	Th.	Th.	Th.	Th.	Th.	Th.	Th.	Th.	Th.
F	F	F	F	F	F	F	F	F	F

1. Colour and say.

0, 1, 2, 3, 4, 5, 6, 7, 8, 9

2. How many birds?



3. Colour all triangles.



4. 0, 1, 2, 3,

, 5, 6,



5. How many dogs?



My score:

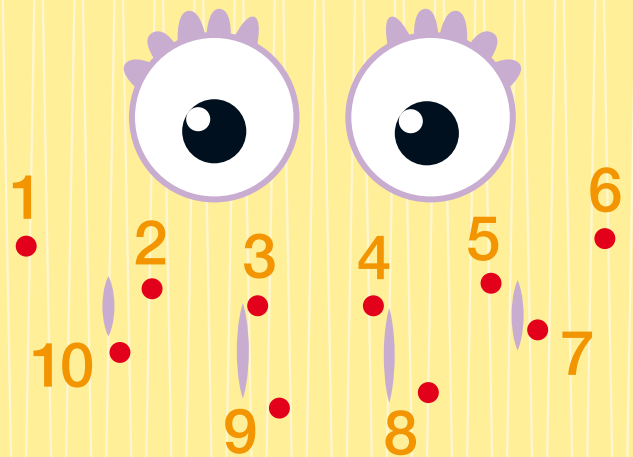
1. Colour the number of candles needed for your birthday this year.



2. Circle 4 triangles.



3. Join the dots.



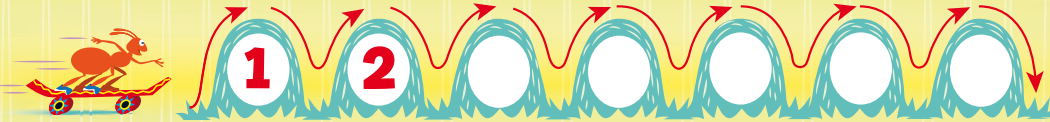
4. 0, 1, 2, 3,

, 5, 6,

, 8




My score:





1. Action Ant went up and down  hills. 2. Write the numbers in each hill.

3. Which clock shows 9 o'clock?



4. Write the correct amount for each coin.








5. 0, 1, 2, 3, 4, , , 7, , , .

My score:

1. Match the words and numbers.

two	3	five	6
one	2	four	5
three	1	six	4

2. 10, 9, 8, , 6, 5, , 3, , .

3. Draw clock hands to show 9 o'clock.



4. Which number is more than 12?



5. Shade 12 footballs.



6. Which container will hold the most?

**A**



**B**



**C**



My score:



1. The teacher will let you ride your bike in the classroom.

yes

☐

no

☐

2. To go to Byron Bay, turn:

left

☐

right

☐

3. To go to the Gold Coast, turn:

left

☐

right

☐

4. How many faces?



5. 10, 11, 12,

- , 14,

- ,

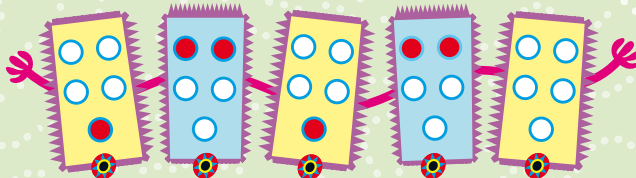
- , 17,

- ,

- ,

My score:

1. Finish the pattern.







6. 20, 19, 18,




7. Today is

- 2.



- 3.

- , 1,

- , 3,

- , 5,

- ,


4. 11,

- , 9, 8,


- , 6,

- ,

- 5.



My score:



5. Shade 12 cakes.



1. Which clock shows 5 o'clock?

2. 17, 18, 19,

3. 22, 21, 20,

4. Today is

6. How many petals are there?



My score:

1. Mum's Home Cafe coffee caps are nearly empty. How many does she need to buy to fill the tray?



2. The number before 7 is

3. The number after 7 is

4. (a) 6, 7, 8, , 10 (b) 16, 17, 18, , 20 (c) 26, 27, 28, , 30

5. Match.

seven

nine

eight

8

7

9

6. Which number is less than 8?



7. Which number is more than 10?



8. Join the dots.



My score:


A



B



C



1. Which book is the most expensive? (A, B or C)

2. Which book is the cheapest?


3. Match the coins to the book price.



4. Which book is the biggest?

5. Which book is the smallest?

6. Yesterday was



My score:

1. The teacher will let you ride your pet camel in the classroom! It:

will happen

won't happen

2. Match. one 2  
two 3  
three 1


3. Finish the pattern.



4. Which flag is:

(a) wider?

(b) taller?




5. Complete.

(a)	5	6		8		10
(b)	15	16		18		20
(c)		16	17	18		
(d)		26	27	28		30

My score:



1. Shade half of each shape.



2. What is the time?

(a) 12 o'clock

(b) 3 o'clock



3. The Tick Tock Company makes clocks every day but not on the weekends. How many days a week does it make clocks?

4. Which has more legs?

(a) emu

(b) echidna

(c) penguin

5. How many legs altogether?



My score:

1. The time is:

(a) 12 o'clock


(b) 8 o'clock



2. Which number is missing? (1-10)



5. Join the dots.



3. How many rockets can you count?



6. One = (a) 3

(b) 2

(c) 1

4. , 1, 2, 3, , 5, 6, , ,

My score:



- Complete the numbers on the number line bus.
- Order from smallest to largest.

8, 14, 4, 9, 11, 7


,  ,  ,  ,  ,

- The time is:

(a) 2 o'clock

(b) 12 o'clock

(c) 1 o'clock



- Which is a month?

(a) yesterday

(b) April

(c) spring

- Shade the numbers that are greater than 12.



- Circle the Australian coin which has the smallest value.



- 



My score:

- The time is: (a) 12 o'clock

(b) 4 o'clock



- The Tick Tock Company makes clocks only on the weekends. How many days a week does it make clocks?

- Shade the numbers less than 12.



- Which is a month? (a) February

(b) winter

(c) Tuesday

- Count the number of boys in your class.



- Count the number of girls in your class.



5. 20, 19,  , 17, 16,  ,  ,

6. 1,  , 3,  , 5,  , 7,

7. 14,  , 16,  , 18,  , 20,

- To eat your lunch it takes about:

(a) 10 days

(b) 10 minutes



My score:



1. The time is:

(a) 1 o'clock  (b) 12 o'clock  (c) 2 o'clock

2. Tomorrow morning you will use a spoon for breakfast. It:

(a) **will happen**  (b) **won't happen**  (c) **might happen**

3. **19**, , **21, 22**, , , **25**

4. **29, 30, 31**, , ,

5. Which is a month?

(a) winter  (b) January  (c) tomorrow

6. Which shape can be shaded in half?

Shade it. (a)  (b) 

7. Which Australian coin has the largest value?

8. Two = 1,  2  or 3

9. This book costs 50c. Is this cheaper than the \$1 yoyo? **yes**  **no**



10.



My score:

1. How many ants?

2. Which tray has half a pizza?



3. **31, 30, 29**, , , ,

4. **24, 25, 26**, , , ,

5.

6. There are  days in a week.

7. There are  months in a year.

8. To eat your lunch it takes about:

(a) 10 days

(b) 10 minutes

(c) 10 hours

My score:



1. The time is:

(a) 7 o'clock

(b) 12 o'clock

(c) 6 o'clock



2. Is your foot longer than your pencil?

3. Is your foot longer than your pencil case?


4. Are you taller than your school chair?

5. 5 = (a) four

(b) five

(c) fifteen

6.




7. 21, 22,


, 25,

My score:

A



B



C



1. Which book is the most expensive?

2. Which book is the cheapest?

3. Which book is the widest?

4. Which book is the tallest?

5.



Which book could you buy with this 50c coin value?

6.



Will this coin value buy any of these books?

yes

no

7. Order the books from fewest pages to most pages.


My score:

THIS SERIES IS AVAILABLE AT ALL GOOD BOOKSELLERS  
CONTACT YOUR SUPPLIER FOR REVIEW COPIES

# New wave mental maths



R.I.C. Publications®



TEACHERS  
GUIDE  
also available

## Features:

- the development of flexible mental strategies
- assessment—whole-class and individual
- diagnosis of problem areas
- curriculum links
- answers

## New wave mental maths workbooks

Book A	RIC-1700	978-1-922116-98-7	\$11.95
Book B	RIC-1701	978-1-9217500-0-7	\$11.95
Book C	RIC-1702	978-1-9217500-1-4	\$11.95
Book D	RIC-1703	978-1-9217500-2-1	\$11.95
Book E	RIC-1704	978-1-9217500-3-8	\$11.95
Book F	RIC-1705	978-1-9217500-4-5	\$11.95
Book G	RIC-1706	978-1-9217500-5-2	\$11.95

## New wave mental maths teachers guide

RIC-1707	978-1-921750-06-9	\$32.95
----------	-------------------	---------

ABN 34 009 207 550



R.I.C. Publications®

PO Box 332, Greenwood  
Western Australia 6924

Tel: (08) 9240 9888 Fax: (08) 9240 1513

Email: mail@ricgroup.com.au

Website: www.ricpublications.com.au



View every page of every book online

TRADE ENQUIRIES WELCOME

Contact Name: \_\_\_\_\_

School: \_\_\_\_\_

Address: \_\_\_\_\_

Postcode: \_\_\_\_\_

Tel: \_\_\_\_\_

Email: \_\_\_\_\_

Date: \_\_\_\_\_

Order No: \_\_\_\_\_



Enclosed is my cheque

Please debit my credit card



Visa



Mastercard



Other

Card No.



Cardholder's Name: \_\_\_\_\_

Expiry Date: \_\_\_\_\_

Signature: \_\_\_\_\_

CVV: \_\_\_\_\_