



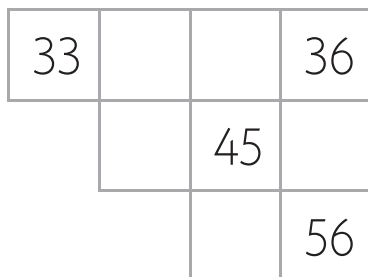
Problem solving tasks

NA1 Count in ones

Student Book page 33

Hundred board piece

Write the missing numbers from this piece of a hundred board.



Mark or highlight the strategy or strategies you used to solve this problem.

1	Guess and check	6	Check for useful information
2	Make a table or chart	7	Find smaller parts of a big problem
3	Draw a picture or diagram	8	Make an organised list
4	Act out the problem	9	Solve a simpler problem
5	Find a pattern	10	Work backwards

NA2 Count in twos

Student Book page 35

Odd houses

On one side of my street the houses have even numbers. The other side have odd numbers. Number the houses on the odd side of these two streets.



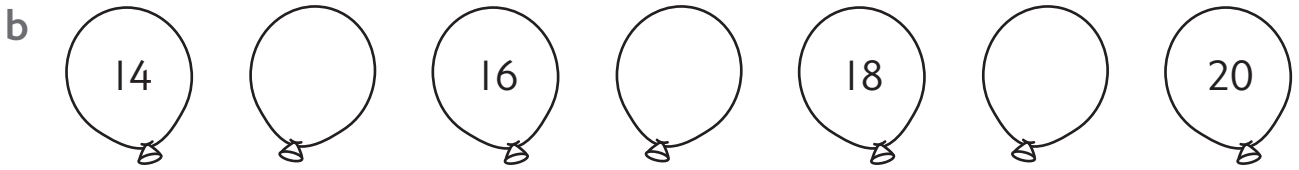
Mark or highlight the strategy or strategies you used to solve this problem.

1	Guess and check	6	Check for useful information
2	Make a table or chart	7	Find smaller parts of a big problem
3	Draw a picture or diagram	8	Make an organised list
4	Act out the problem	9	Solve a simpler problem
5	Find a pattern	10	Work backwards




NA1 Count in ones

Count on and write the missing numbers.



Count back and write the missing numbers.



Count on and write the missing numbers.

1	2	3	4		6	7	8		10
11		13		15	16	17			20
21	22	23		25			28	29	
31		33	34			37		39	40
41		43		45		47		49	50
51	52	53	54	55	56	57	58	59	60
61	62			65	66		68		70
71	72	73		75		77		79	80
		83	84	85		87	88	89	90
91	92			95					



Applies understanding

Understands concept

Requires support

Date ___/___/___